

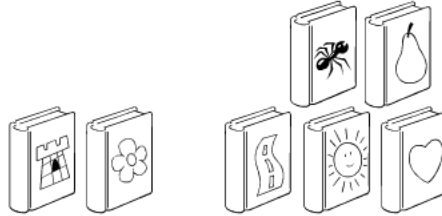
Name \_\_\_\_\_

**Math**

Addition and Subtraction  
at the Library


Read the story and look at the picture. Then write the number sentence that goes with the story.

1. Luis reads 2 books.  
He reads 5 more. How  
many books did Luis  
read altogether?



$$\begin{array}{r} 2 \quad + \quad 5 \quad = \quad 7 \\ \hline \end{array}$$

2. Maya reads a book  
about birds. There are  
6 birds sitting in a tree.  
Then 3 birds fly away.  
How many birds are left?



$$\begin{array}{r} \quad - \quad \quad = \quad \quad \\ \hline \end{array}$$

3. Kobe reads 4 books to  
his sister. He reads 1 more.  
How many books does  
Kobe read in all?




$$\begin{array}{r} \quad + \quad \quad = \quad \quad \\ \hline \end{array}$$

4. Sue Lin takes out 7 books  
from the library. She gives  
Ben 2. How many does  
Sue Lin have left?



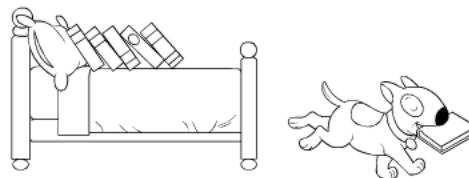
$$\begin{array}{r} \quad - \quad \quad = \quad \quad \\ \hline \end{array}$$

5. Jade has 7 books on  
her bookcase. She has 2  
more in her backpack.  
How many books does  
she have in all?



$$\begin{array}{r} \square \quad = \quad \quad \\ \hline \end{array}$$

6. Hugo's dog finds 6 books  
on the bed. He takes  
1 to bury in the yard.  
How many books are  
still on the bed?



$$\begin{array}{r} \square \quad = \quad \quad \\ \hline \end{array}$$