


ABCmouse®


# First Grade Addition Worksheets



FREE FOR TEACHERS

## Award-Winning Educational Programs!

*ABCmouse* (Toddler–2nd), *My Math Academy* (PreK–5th), *My Reading Academy* (PreK–5th), and *My Reading Academy Español* (PreK–2nd) are FREE for educators!













SCAN NOW FOR  
FREE ACCESS!

[abcmouse.com/printables](https://www.abcmouse.com/printables)

Name \_\_\_\_\_

Math  
Addition: 1 - 9

Look at the number of fish in each group. Read the numbers. Write the sum on the line. The first one has been done for you.



$$5 + 3 = \underline{8}$$

$$4 + 4 = \underline{\quad}$$

$$2 + 3 = \underline{\quad}$$

$$2 + 5 = \underline{\quad}$$

$$8 + 1 = \underline{\quad}$$

Name \_\_\_\_\_

**Number Search**  
addition sentences within 20

Find 10 addition sentences hidden below. Circle each fact and its correct answer. Then, add the + and = symbols. The first one has been done for you!

3	11	<b>6 + 6 = 12</b>	0	12		
12	10	8	18	5	8	5
14	5	7	2	1	9	17
2	11	6	20	12	10	13
16	4	8	4	8	19	2
20	3	7	2	12	6	5
4	11	15	3	6	7	4
8	7	0	9	4	13	1




Name \_\_\_\_\_


**Math Printable**

Illustrate the Number Sentences

Look at the number sentences. Write numbers to complete each number sentence. Draw a picture to illustrate the number sentence.




$$2 + 7 = \underline{\quad}$$



$$4 + \underline{\quad} = 6$$

Name \_\_\_\_\_

**Paint-By-Numbers**  
Addition: Punctuation Mark  
*Beginner Level*



**Color Key**


- 15:** beige
- 13:** red
- 7:** light green
- 17:** green
- 14:** orange
- 9:** blue
- 10:** gray

Name \_\_\_\_\_

# Paint-By-Numbers

Addition: Birdhouse

Beginner Level



## Color Key


- 11: brown
- 10: light green
- 18: dark purple
- 12: black
- 13: blue
- 16: green
- 19: yellow
- 14: aqua
- 15: tan
- 17: light blue

Name \_\_\_\_\_

## Paint-By-Numbers

Addition: Punctuation Mark

Challenge Level



### Color Key

- 15:** beige
- 13:** red
- 7:** light green
- 17:** green
- 14:** orange
- 9:** blue
- 10:** gray




Name \_\_\_\_\_

# Paint-By-Numbers

Addition: Birdhouse

Challenge Level



## Color Key


- 11: brown
- 10: light green
- 18: dark purple
- 12: black
- 13: blue
- 16: green
- 19: yellow
- 14: aqua
- 15: tan
- 17: light blue



Name \_\_\_\_\_

# Paint-By-Numbers

Addition: Punctuation Mark  
*Super Challenge Level*



## Color Key

- 15:** beige
- 13:** red
- 7:** light green
- 17:** green
- 14:** orange
- 9:** blue
- 10:** gray

Name \_\_\_\_\_

Draw lines to match the sums. Write the matching word above each answer below to make a sentence.



- 1.  $8 + 7 =$
- 2.  $5 + 6 =$
- 3.  $9 + 8 =$
- 4.  $7 + 5 =$
- 5.  $8 + 8 =$
- 6.  $9 + 5 =$
- 7.  $7 + 6 =$

- A.  $10 + 2$  tricks
- B.  $10 + 4$  adding
- C.  $10 + 1$  Using
- D.  $10 + 5$  more
- E.  $10 + 3$  makes
- F.  $10 + 6$  fun
- G.  $10 + 7$  !

$8 + 7 = 10 + 5$

more


11                      12                      13                      14                      15                      16                      17

Answer Key 1. D 2. C 3. G 4. A 5. F 6. B 7. E Using tricks makes adding more fun!

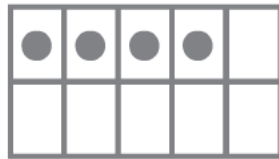

Name \_\_\_\_\_

**Addition**  
Adding Within 20

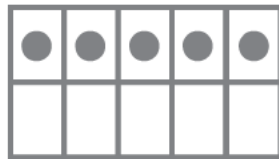
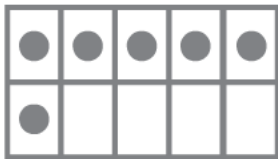
Put the correct number of dots for the sum in the ten-frames below the space for the sum. Then write the number for the sum.



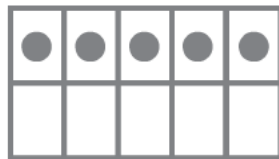

$$10 + 4 = \underline{\quad}$$



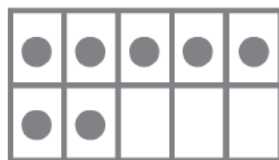

$$6 + 5 = \underline{\quad}$$



$$8 + 5 = \underline{\quad}$$




$$9 + 7 = \underline{\quad}$$



Name \_\_\_\_\_

Look at the group of numbers. Write one way you can find the sum. Write the word. Then read the riddle and its answer!



1.  $4 + 6 + 1 = \underline{\quad 11 \quad}$  it  
 $4 + 6 = 10, 10 + 1 = \textcircled{11}$

6.  $2 + 4 + 3 = \underline{\quad \quad}$  time

2.  $3 + 2 + 3 = \underline{\quad \quad}$  What

7.  $3 + 2 + 7 = \underline{\quad \quad}$  when

3.  $5 + 4 + 5 = \underline{\quad \quad}$  elephants

8.  $1 + 5 + 9 = \underline{\quad \quad}$  are

4.  $7 + 6 + 3 = \underline{\quad \quad}$  chasing

9.  $2 + 7 + 1 = \underline{\quad \quad}$  is

5.  $8 + 5 + 4 = \underline{\quad \quad}$  you

10.  $5 + 2 + 6 = \underline{\quad \quad}$  ten


Riddle:

			it	
<u>8</u>	<u>9</u>	<u>10</u>	<u>11</u>	<u>12</u>
<u>13</u>	<u>14</u>	<u>15</u>	<u>16</u>	<u>17</u>

Answer Key 1. 11 2. 8 3. 14 4. 16 5. 17 6. 9 7. 12 8. 15 9. 10 10. 13  
Riddle: What time is it when ten elephants are chasing you? Answer: Ten after one!

Name \_\_\_\_\_

Add the numbers to find the sums. Match the words to the numbers to solve the riddle.



1.  $3 + 2 + 6 = \underline{\quad 11 \quad}$  is

6.  $6 + 8 + 7 = \underline{\quad \quad}$  sea

2.  $4 + 5 + 5 = \underline{\quad \quad}$  found

7.  $9 + 2 + 9 = \underline{\quad \quad}$  sky

3.  $7 + 8 + 4 = \underline{\quad \quad}$  the

8.  $2 + 4 + 6 = \underline{\quad \quad}$  not

4.  $6 + 1 + 3 = \underline{\quad \quad}$  star

9.  $9 + 8 + 7 = \underline{\quad \quad}$  star

5.  $9 + 5 + 2 = \underline{\quad \quad}$  in

10.  $3 + 4 + 1 = \underline{\quad \quad}$  What

Riddle:

<u>8</u>	<u>10</u>	<u>11</u> is	<u>12</u>
<u>14</u>	<u>16</u>	<u>19</u>	<u>20</u>

Answer:

<u>21</u>	<u>24</u>
-----------	-----------

Answer Key 1. 11 2. 14 3. 19 4. 10 5. 16 6. 21 7. 20 8. 12 9. 24 10. 8  
 Riddle: What star is not found in the sky? Answer: sea star